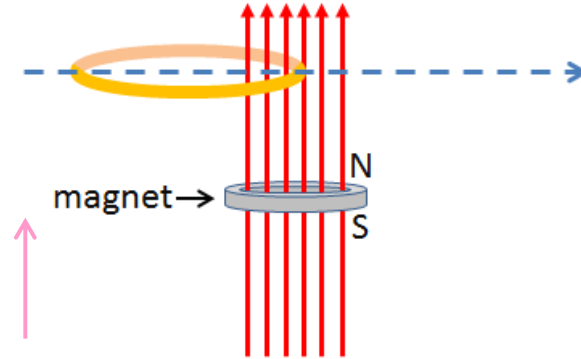


Checkpoint 2

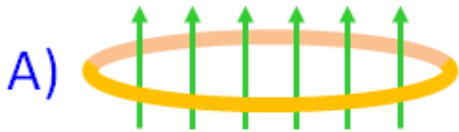


A magnet makes the vertical magnetic field shown by the red arrows. A horizontal conducting loop is entering the field as shown.



Direction of positive flux

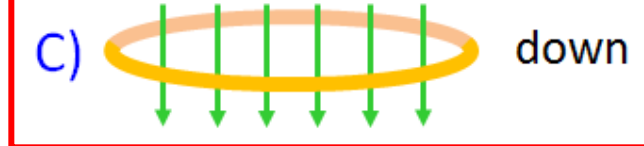
At the instant shown above, what is the direction of the additional flux produced by the current induced in the loop?



up



zero



down

